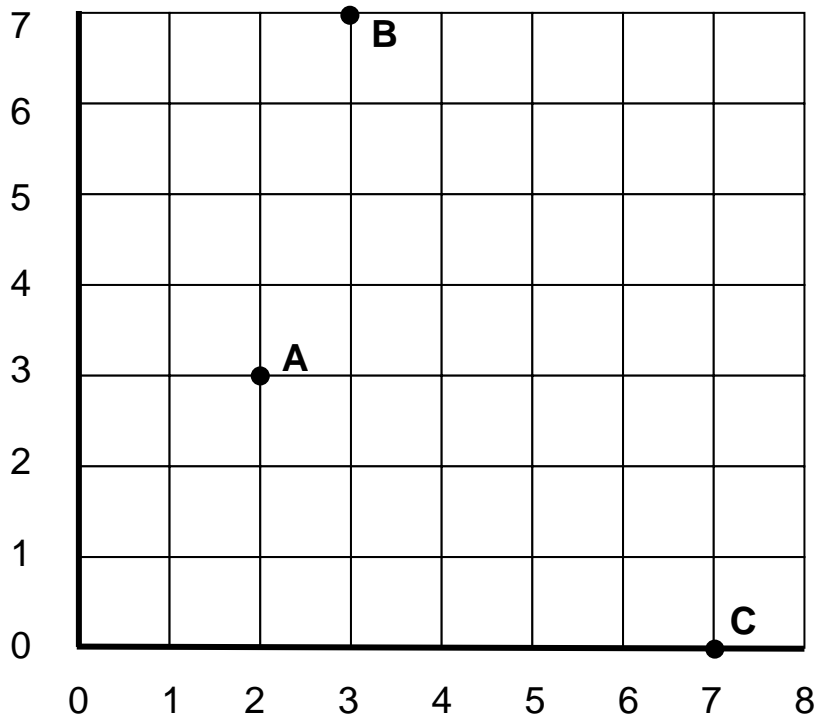


KS2 Maths SAT questions: Shape (2)

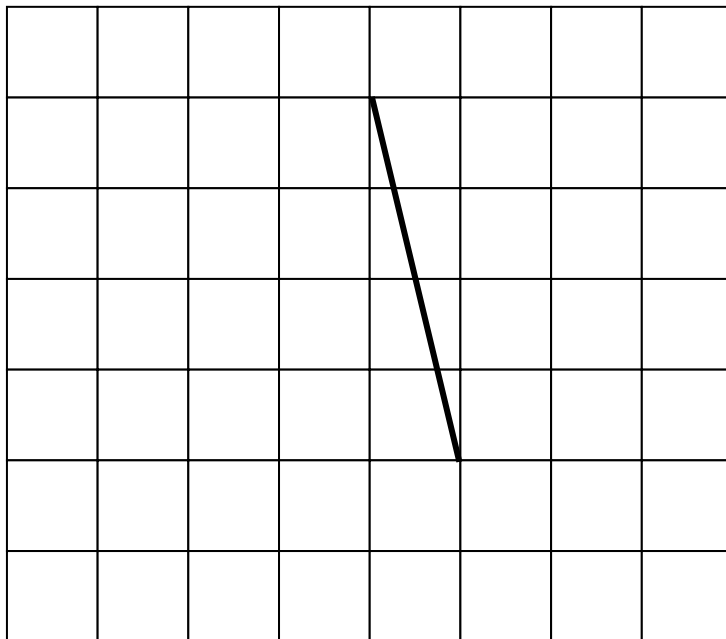
Maths worksheets from mathsblog.co.uk

1) Write down the co-ordinates of the points **A**, **B** and **C** on the grid.



**A** is ( 2 , 3 )      **B** is ( 3 , 7 )      **C** is ( 7 , 0 )

2)



Draw two more straight lines joining onto the one in the diagram to make an **isosceles triangle**.

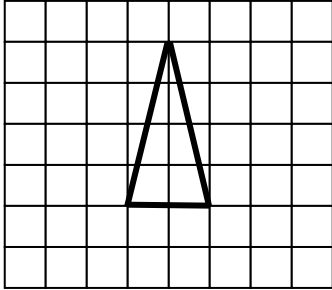
## KS2 Maths SAT questions: Shape (2)

Maths worksheets from [mathsblog.co.uk](http://mathsblog.co.uk)

### Answers

#### Page 1

1. A (2,3)   B (3,7)   C (7,0)



2.

or any other isosceles triangle.